




half past 3




8 o'clock




half past 1



half past 10



4 o'clock



6 o'clock

O'Clock and Half Past Answers

The hour hand is *pointing to 7*.The minute hand would be pointing to *12*.The time is *7 o'clock*.The hour hand is *halfway between 12 and 1*.The minute hand would be pointing to *6*.The time is *half past 12*.The hour hand is *halfway between 4 and 5*.The minute hand would be pointing to *6*.The time is *half past 4*.The hour hand is *pointing to 6*.The minute hand would be pointing to *12*.The time is *6 o'clock*.

O'Clock and Half Past Answers

Tina would have a drink at half past 6, half past 7, half past 8, half past 9, half past 10, half past 11.

